

Please write clearly in block capitals.

Centre number

--	--	--	--	--

Candidate number

--	--	--	--

Surname

Forename(s)

Candidate signature

GCSE COMBINED SCIENCE: TRILOGY

F

Foundation Tier
Chemistry Paper 1F

Thursday 16 May 2019

Morning

Time allowed: 1 hour 15 minutes

Materials

For this paper you must have:

- a ruler
- a scientific calculator
- the periodic table (enclosed).

Instructions

- Use black ink or black ball-point pen.
- Fill in the boxes at the top of this page.
- Answer **all** questions in the spaces provided.
- Do all rough work in this book. Cross through any work you do not want to be marked.
- In all calculations, show clearly how you work out your answer.

Information

- The maximum mark for this paper is 70.
- The marks for questions are shown in brackets.
- You are expected to use a calculator where appropriate.
- You are reminded of the need for good English and clear presentation in your answers.

For Examiner's Use	
Question	Mark
1	
2	
3	
4	
5	
6	
7	
TOTAL	



0 1

This question is about energy changes.

0 1 . 1

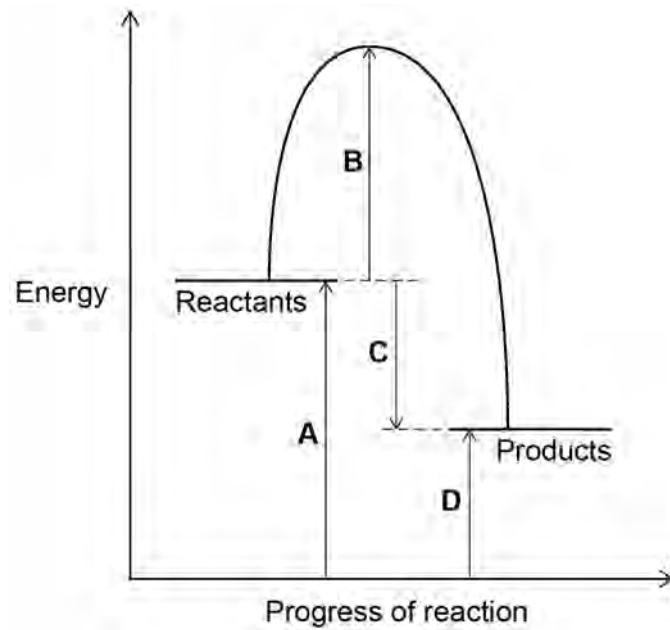
Which of these items uses an endothermic reaction?

[1 mark]Tick (✓) **one** box.

Hand warmer

Sports injury pack

Self-heating can

Figure 1 shows the reaction profile for an exothermic reaction.**Figure 1**

0 1 . 2 Which letter represents the activation energy for the reaction?

[1 mark]

Tick (✓) **one** box.

A B C D

0 1 . 3 Which letter represents the overall energy change for the reaction?

[1 mark]

Tick (✓) **one** box.

A B C D

0 1 . 4 Complete the sentence.

Choose the answer from the box.

[1 mark]

lower than

the same as

higher than

In an exothermic reaction the energy of the products

is _____ the energy of the reactants.

0 1 . 5 A student measured the temperature at the start and at the end of a reaction.

Name the apparatus used to measure the temperature.

[1 mark]

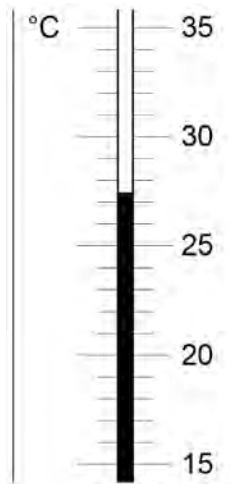
Question 1 continues on the next page

Turn over ►



0 1 . 6 Figure 2 shows the temperature at the end of the reaction.

Figure 2



Complete **Table 1**.

Use **Figure 2**.

[2 marks]

Table 1

Temperature at start in °C	14.3
Temperature at end in °C	
Change in temperature in °C	



0 2

This question is about salts and electrolysis.

A student wants to make copper chloride crystals.

The student adds excess copper oxide to some hot acid.

The student stirs the mixture.

0 2 . 1

Which acid should the student use?

[1 mark]

Tick (✓) **one** box.

Hydrochloric acid

Nitric acid

Sulfuric acid

0 2 . 2

Suggest how the student would know that excess copper oxide has been added.

[1 mark]

Question 2 continues on the next page

Turn over ►

0 2 . 3 There are four more stages, **A**, **B**, **C** and **D**, to make copper chloride crystals.

The stages **A**, **B**, **C** and **D** are not in the correct order.

Stage **A** Partially evaporate by heating with a water bath

Stage **B** Filter the mixture into an evaporating basin

Stage **C** Leave to crystallise

Stage **D** Remove and dry the crystals

Put stages **A**, **B**, **C** and **D** in the correct order.

[2 marks]

First stage _____

Second stage _____

Third stage _____

Fourth stage _____

0 2 . 4 Molten copper chloride can be electrolysed.

State the product at each electrode when molten copper chloride is electrolysed.

[2 marks]

Negative electrode _____

Positive electrode _____

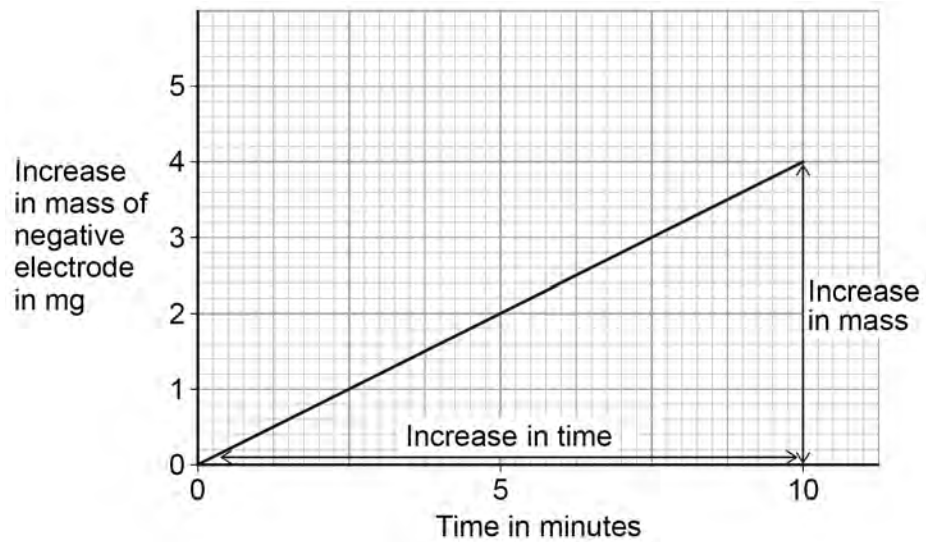


0 2 . 5 A solution of copper chloride is electrolysed.

Figure 3 shows a graph of the increase in mass of the negative electrode.

This increase is shown over a time of 10 minutes.

Figure 3



Calculate the gradient of the line in **Figure 3**.

Use the equation:

$$\text{Gradient} = \frac{\text{increase in mass in mg}}{\text{increase in time in minutes}}$$

[3 marks]

Increase in mass _____

Increase in time _____

Gradient _____

Gradient = _____ mg per minute

Turn over ►



0 2 . 6 Aluminium is produced by electrolysis of a molten mixture.

Complete the sentence.

Choose the answers from the box.

[2 marks]

carbon chloride cryolite oxide sulfate water

The molten mixture contains _____ and

aluminium _____ .

11



0 3

This question is about the periodic table and argon.

0 3 . 1

What order did scientists use to arrange elements in early periodic tables?

[1 mark]Tick (✓) **one** box.

Atomic weight of element

Number of neutrons in an atom of element

Size of atoms of element

Year element was discovered

0 3 . 2

In early periodic tables some elements were placed in the wrong groups.

Mendeleev overcame some of these problems in his periodic table.

Complete the sentence.

[1 mark]

Mendeleev did this by leaving _____ for elements that had not been discovered.

Question 3 continues on the next page**Turn over ►**

0 3 . 3 What is the name of the group that contains argon?

[1 mark]

Tick (✓) **one** box.

Alkali metals

Halogens

Noble gases

0 3 . 4 An atom of argon is represented as ${}^{40}_{18}\text{Ar}$

Determine the number of protons and the number of neutrons in one atom of argon.

[2 marks]

Number of protons _____

Number of neutrons _____

0 3 . 5 Different atoms of argon are, ${}^{39}_{18}\text{Ar}$ and ${}^{38}_{18}\text{Ar}$

What is the name given to these different atoms of argon?

[1 mark]

Tick (✓) **one** box.

Fullerenes

Ions

Isotopes

Molecules



0 3 . 6

What is the electronic structure of an argon atom, ${}_{18}^{40}\text{Ar}$?

[1 mark]

Tick (✓) **one** box.2 2, 8 2, 8, 2 2, 8, 8

0 3 . 7

Why is argon unreactive?

[1 mark]

8**Turn over for the next question****Turn over ►**

0 4 . 4 Sodium chloride (NaCl) is an ionic compound.

Write the formulae of the ions in sodium chloride.

[2 marks]

Sodium ion _____

Chloride ion _____

0 4 . 5 Complete the sentence.

Choose the answer from the box.

[1 mark]

an atom an electron a neutron a proton

Potassium is more reactive than sodium.

This is because potassium loses _____ more easily than sodium.

0 4 . 6 How does the size of a potassium atom compare with the size of a sodium atom?

Give a reason for your answer.

[2 marks]

Reason _____

11

Turn over for the next question

Turn over ►



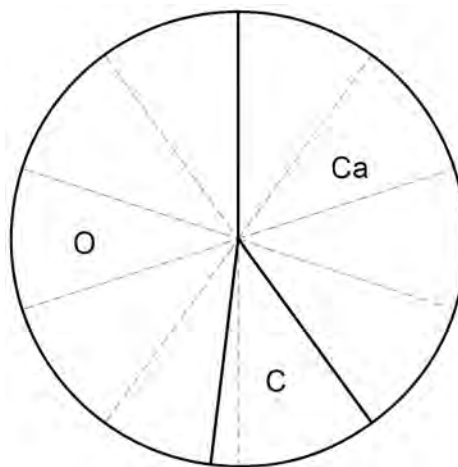
0 5

This question is about oxygen and compounds of oxygen.

0 5. **1**

What is the state symbol of oxygen at room temperature?

[1 mark]

0 5. **2****Figure 4** shows the percentage by mass of the elements calcium, carbon and oxygen in calcium carbonate.**Figure 4**

What is the percentage by mass of calcium in calcium carbonate?

[1 mark]

Percentage = _____ %



0 5 . 3 At high temperature, sodium nitrate decomposes into sodium nitrite and oxygen.

A student heats three samples of sodium nitrate.

The mass of each sample was 4.50 g

The mass of solid after heating was recorded.

Table 2 shows the mass of solid after heating in each experiment.

Table 2

Experiment	Mass of solid after heating in g
1	3.76
2	3.98
3	4.09

Calculate the mean mass of solid after heating.

Give your answer to 3 significant figures.

[3 marks]

Mean mass of solid after heating = _____ g

Question 5 continues on the next page

Turn over ►



0 5 . 4 Table 3 shows the electronic structure of hydrogen and oxygen.

Table 3

Element	Electronic structure
Hydrogen	1
Oxygen	2,6

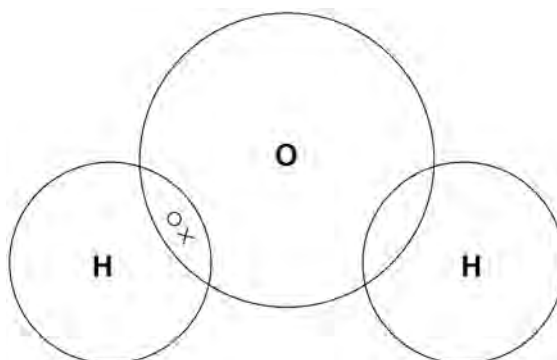
Figure 5 shows part of a dot and cross diagram of a molecule of water (H_2O).

Complete the dot and cross diagram.

You should show only the electrons in the outer energy levels.

[2 marks]

Figure 5



Oxygen and sulfur are examples of simple molecules.

0 5 . 5 Complete the sentence.

Choose the answer from the box.

[1 mark]

covalent


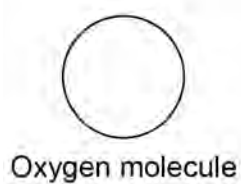
ionic

metallic

There are _____ bonds between the atoms of oxygen in an oxygen molecule.



0 5 . 6

Figure 6 shows the relative sizes of an oxygen molecule and a sulfur molecule.**Figure 6**

How does the boiling point of sulfur compare with the boiling point of oxygen?

Complete the sentences.

[2 marks]

The boiling point of sulfur is _____ the boiling point of oxygen.

This is because in sulfur the intermolecular forces are _____
than the intermolecular forces in oxygen.

10

Turn over ►

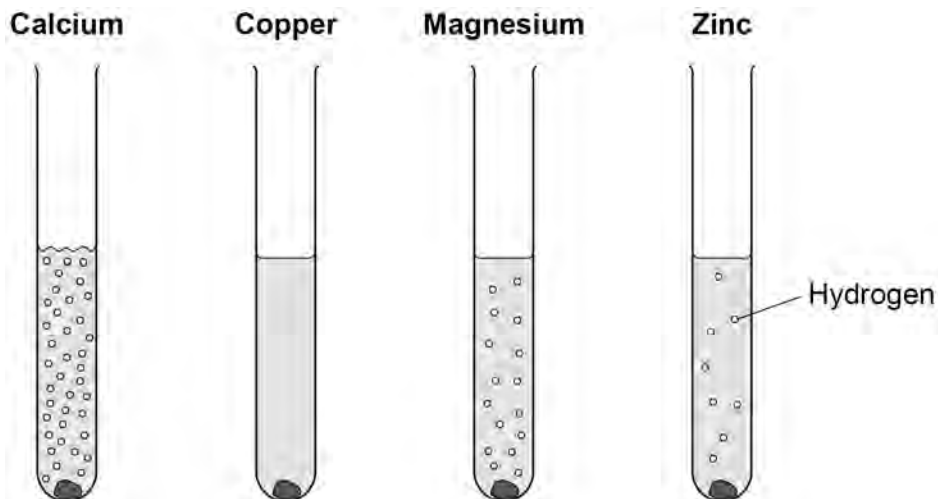


0 6

This question is about reactions of metals.

Figure 7 shows what happens when calcium, copper, magnesium and zinc are added to hydrochloric acid.

Figure 7



0 6 . 1

What is the order of decreasing reactivity of these four metals?

[1 mark]

Tick (✓) **one** box.

Zn Ca Cu Mg

Ca Cu Mg Zn

Cu Zn Ca Mg

Ca Mg Zn Cu



A student wants to make a fair comparison of the reactivity of the metals with hydrochloric acid.

0 6 . 2 Name **two** variables that must be kept constant.

[2 marks]

1 _____

2 _____

0 6 . 3 What is the independent variable in this reaction?

[1 mark]

0 6 . 4 Predict the reactivity of beryllium compared with magnesium.

Give a reason for your answer.

Use the periodic table.

[2 marks]

Reason _____

0 6 . 5 A solution of hydrochloric acid contains 3.2 g of hydrogen chloride in 50 cm³

Calculate the concentration of hydrogen chloride in g per dm³

[3 marks]

Concentration = _____ g per dm³

9

Turn over ►



0 7

This question is about salts.

Ammonium nitrate solution is produced when ammonia gas reacts with nitric acid.

0 7 . 1

Give the state symbol for ammonium nitrate solution.

[1 mark]

0 7 . 2

What is the formula of nitric acid?

[1 mark]Tick (✓) **one** box.

HCl

HNO₃H₂SO₄NH₄OH**0 7 . 3**

Ammonia gas dissolves in water to produce ammonia solution.

Ammonia solution contains hydroxide ions, OH⁻

A student adds universal indicator to solutions of nitric acid and ammonia.

What colour is observed in each solution?

[2 marks]

Colour in nitric acid

Colour in ammonia solution



0 7 . 4

The student gradually added nitric acid to ammonia solution.

Which row, **A**, **B**, **C** or **D**, shows the change in pH as the nitric acid is added until in excess?

[1 mark]

Tick (✓) **one** box.

	pH of ammonia solution at start	pH after addition of excess nitric acid	
A	10	7	<input type="checkbox"/>
B	2	10	<input type="checkbox"/>
C	7	1	<input type="checkbox"/>
D	10	2	<input type="checkbox"/>

0 7 . 5

Calculate the percentage by mass of oxygen in ammonium nitrate (NH_4NO_3).

Relative atomic masses (A_r): H = 1 N = 14 O = 16

Relative formula mass (M_r): $\text{NH}_4\text{NO}_3 = 80$

[3 marks]

Percentage by mass of oxygen = _____ %

Question 7 continues on the next page

Turn over ►



There are no questions printed on this page

*Do not write
outside the
box*

**DO NOT WRITE ON THIS PAGE
ANSWER IN THE SPACES PROVIDED**



There are no questions printed on this page

*Do not write
outside the
box*

**DO NOT WRITE ON THIS PAGE
ANSWER IN THE SPACES PROVIDED**

Copyright information

For confidentiality purposes, from the November 2015 examination series, acknowledgements of third-party copyright material are published in a separate booklet rather than including them on the examination paper or support materials. This booklet is published after each examination series and is available for free download from www.aqa.org.uk after the live examination series.

Permission to reproduce all copyright material has been applied for. In some cases, efforts to contact copyright-holders may have been unsuccessful and AQA will be happy to rectify any omissions of acknowledgements. If you have any queries please contact the Copyright Team, AQA, Stag Hill House, Guildford, GU2 7XJ.

Copyright © 2019 AQA and its licensors. All rights reserved.



2 4



1 9 6 G 8 4 6 4 / C / 1 F

IB/M/Jun19/8464/C/1F